

Numbers from Twenty-one to Fifty



0119CH08

Fill in the blanks.

18

Write the number.

Draw the bundles and ones.

TEN ONES

TEN	ONES	14
1	4	

TEN ONES

TEN	ONES	15
1	5	

TEN ONES

TEN	ONES	

TENS ONES

TENS	ONES	20
2	0	

TEN ONES


TEN	ONES	

TENS ONES

TENS	ONES	22
2	2	

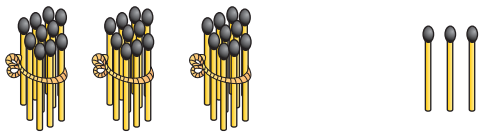


Write the number




 TENS ONES

TENS	ONES	25
2	5	



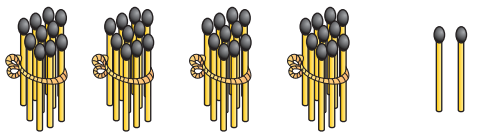
 TENS ONES

TENS	ONES	33
3	3	




 TENS ONES

TENS	ONES	
2	3	



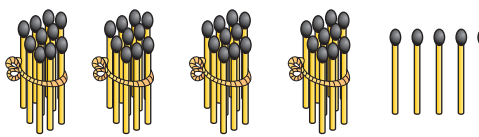
 TENS ONES

TENS	ONES	
4	2	



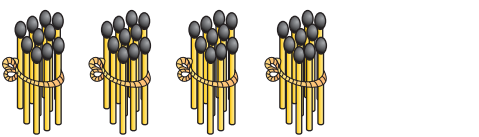
 TENS ONES

TENS	ONES	



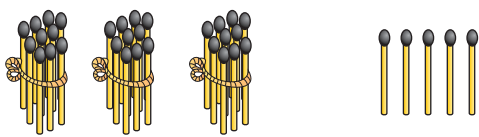
 TENS ONES

TENS	ONES	




 TENS ONES

TENS	ONES	



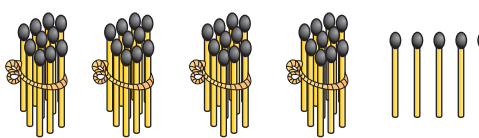
 TENS ONES

TENS	ONES	



 TENS ONES

TENS	ONES	



 TENS ONES

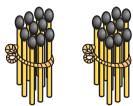
TENS	ONES	





Numbers from 21 to 40

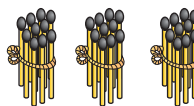
Fill in the blanks.



21

2 TENS

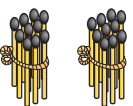
1 ONE



31

3 TENS

1 ONE



22

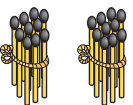
2 TENS

2 ONES



3 TENS

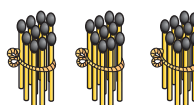
2 ONES



23

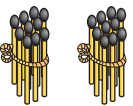
2 TENS

3 ONES



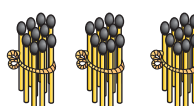
3 TENS

3 ONES



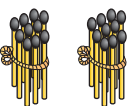
2 TENS

4 ONES



3 TENS

4 ONES



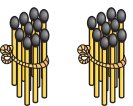
2 TENS

5 ONES



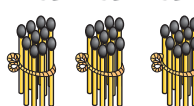
3 TENS

5 ONES



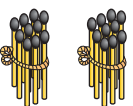
2 TENS

6 ONES



3 TENS

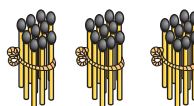
6 ONES



27

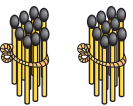
2 TENS

7 ONES



3 TENS

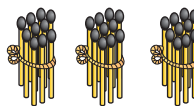
7 ONES



28

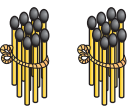
2 TENS

8 ONES



3 TENS

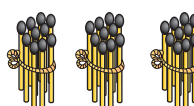
8 ONES



29

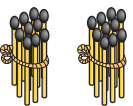
2 TENS

9 ONES



3 TENS

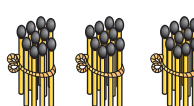
9 ONES



30

2 TENS

1 TEN



3 TENS

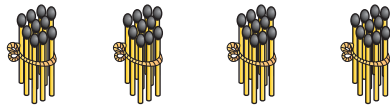
1 TEN

40



Numbers from 41 to 50

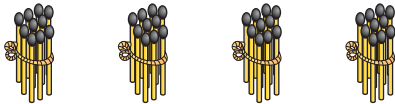
Fill in the blanks.



41

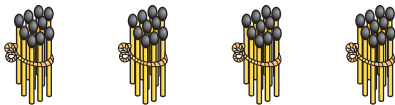
4 TENS

1 ONE



4 TENS

2 ONES



43

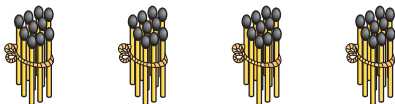
4 TENS

3 ONES



4 TENS

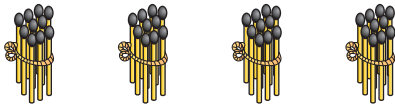
4 ONES



45

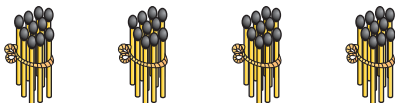
4 TENS

5 ONES



4 TENS

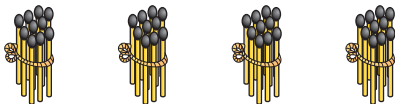
6 ONES



47

4 TENS

7 ONES



48

4 TENS

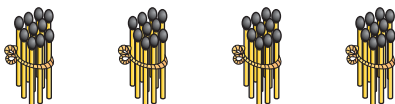
8 ONES



49

4 TENS

9 ONES



50

4 TENS

1 Ten





Write the missing numbers

1	2	3	4	5	6	7	8	9	10
11		13			16				
	22					27			
							38		
		43						49	

